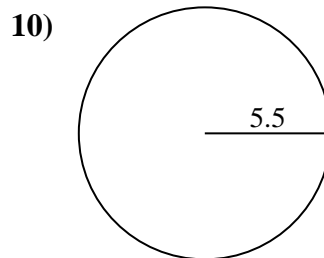
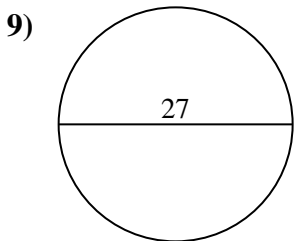
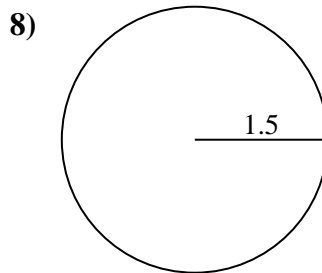
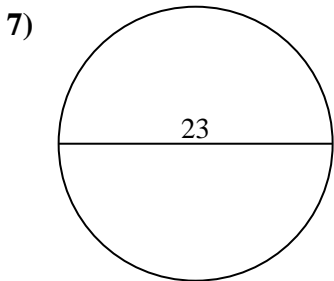
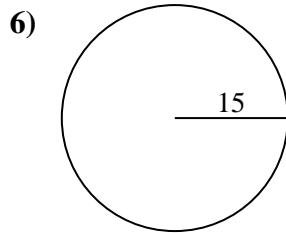
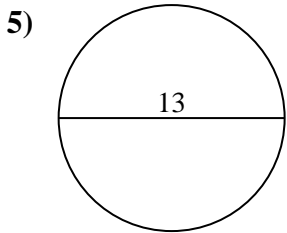
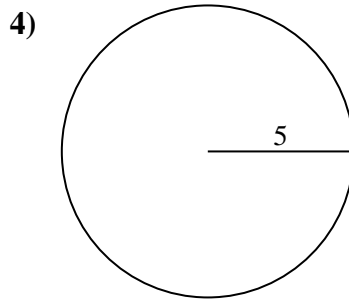
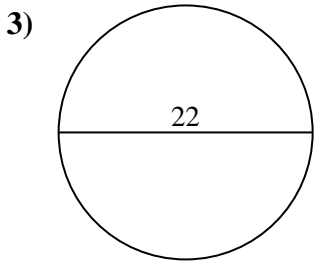
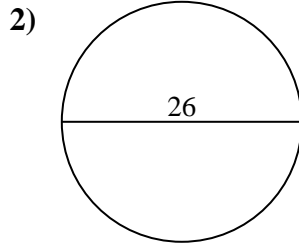
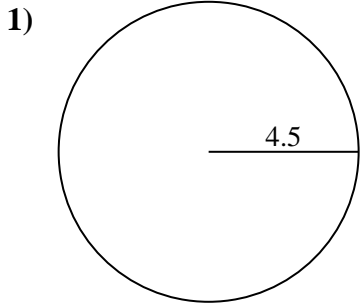




Find the area of each circle. Circles are not to scale.



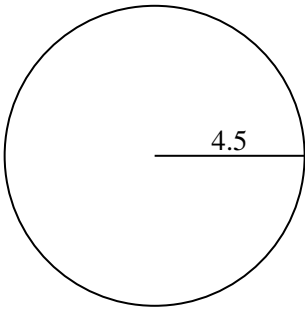
Answers

- 1. _____
- 2. _____
- 3. _____
- 4. _____
- 5. _____
- 6. _____
- 7. _____
- 8. _____
- 9. _____
- 10. _____

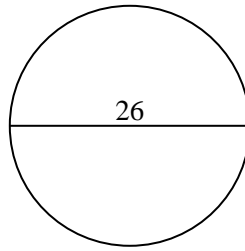


Find the area of each circle. Circles are not to scale.

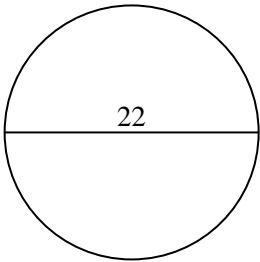
1)



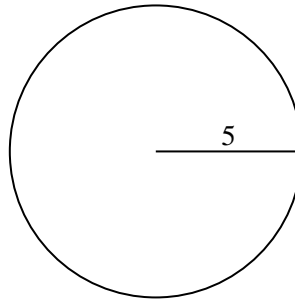
2)



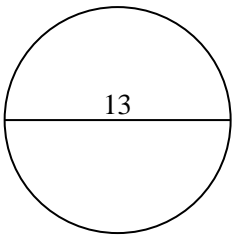
3)



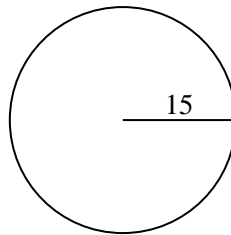
4)



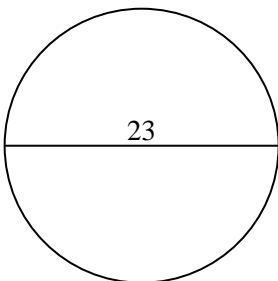
5)



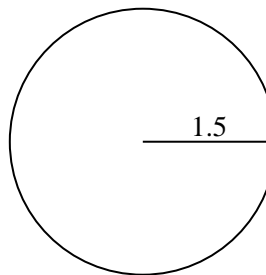
6)



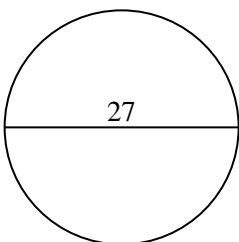
7)



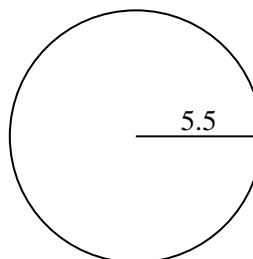
8)



9)



10)

**Answers**

1. 63.62 cm²
2. 530.93 cm²
3. 380.13 cm²
4. 78.54 cm²
5. 132.73 cm²
6. 706.86 cm²
7. 415.48 cm²
8. 7.07 cm²
9. 572.56 cm²
10. 95.03 cm²